

ASSIGNMENT – 1

CLASS I

MATHEMATICS



CHAPTER 1

NUMBERS

BOOKWORK

1. Do page no. 19, 21, 22, 25 and 26 of your Mathematics Textbook.
2. Do page no. 11 to 18 of your Mathematics Workbook.

COPYWORK



Ascending order
(smallest to the biggest)

a) 17 14 10 12

10 12 14 17

b) 34 38 35 32

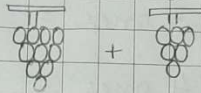
32 34 35 38

c) 30 60 80 20

20 30 60 80

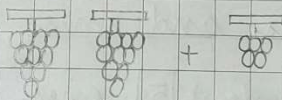
Tens and ones

1.



1 ten + 6 ones = 16

2.



2 tens + 5 ones = 25

14

Tens and ones

a) 2 tens + 3 ones = 23

b) 6 tens + 4 ones = 64

c) 4 tens + 0 ones = 40

Write tens and ones.

a) 15 = 1 ten + 5 ones

b) 57 = 5 tens + 7 ones

c) 80 = 8 tens + 0 ones